


Name _____


Directions: Subtract down and write the answer in the circles then add the answers across and write that answer in the darker circle.


10	9	8	9	8	10	8
- 2	- 4	- 6	- 6	- 3	- 4	- 5

○ 8 ○ ○ ○ ○ ○ ○ ○ 





7	10	6	11	12	6	11
- 3	- 4	- 2	- 5	- 3	- 1	- 2



○ ○ ○ ○ ○ ○ ○ 


12	15	12	14	18	16	15
- 9	- 6	- 4	- 7	- 9	- 8	- 7



○ ○ ○ ○ ○ ○ ○ 

Name _____

Directions: Moving from left to right circle each multiplication fact below. There are 40 problems hidden in the vase.



4 9 36 11 6 2 12 8 14 9 7 63 3 1

4 7 28 3 9 27 9 1 18 17 3 5 15 8 9 72 6 2

8 5 40 15 3 6 9 54 3 2 20 7 7 49 3 4 5 19 2 6

4 3 6 9 54 18 3 8 4 32 36 4 2 16 5 5 25 16 1 24 2

2 13 24 4 7 28 4 8 32 46 4 4 16 3 11 9 3 27 5 9 45 52 9 3

7 21 8 8 64 9 28 4 9 9 81 7 14 31 3 4 12 3 3 41 6 7 42 9 6

9 6 54 7 15 43 5 3 15 6 4 24 16 9 3 27 1 8 2 16 4 4 8

5 5 26 4 5 20 8 3 24 6 6 36 32 9 2 18 26 6 9 54 18 1

1 4 4 4 8 32 8 3 24 49 7 6 42 14 7 9 63 7

6 6 36 5 4 5 5 25 40 6 2 5 10