


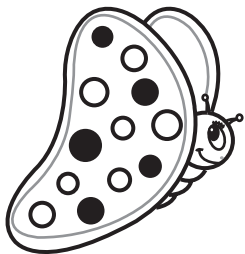





Name \_\_\_\_\_

**Directions:** Write the numbers in the four-leaf clovers as you count backward from the first number in each row.



Name \_\_\_\_\_

**Directions:** Solve each problem and fill in the puzzle.

	1			2			
			3			4	
		5			6		
	7			8			
			9			10	
		11			12		

Across:

1.  $6 + 4 =$  \_\_\_\_\_
2.  $8 + 6 =$  \_\_\_\_\_
3.  $5 + 7 =$  \_\_\_\_\_
5.  $9 + 3 =$  \_\_\_\_\_
6.  $7 + 6 =$  \_\_\_\_\_
7.  $4 + 9 =$  \_\_\_\_\_
8.  $8 + 7 =$  \_\_\_\_\_
9.  $3 + 8 =$  \_\_\_\_\_
11.  $9 + 8 =$  \_\_\_\_\_
12.  $8 + 8 =$  \_\_\_\_\_

Down:

1.  $6 + 9 =$  \_\_\_\_\_
2.  $4 + 8 =$  \_\_\_\_\_
3.  $6 + 6 =$  \_\_\_\_\_
4.  $6 + 7 =$  \_\_\_\_\_
5.  $9 + 4 =$  \_\_\_\_\_
6.  $9 + 6 =$  \_\_\_\_\_
7.  $5 + 5 =$  \_\_\_\_\_
8.  $9 + 2 =$  \_\_\_\_\_
9.  $8 + 9 =$  \_\_\_\_\_
10.  $9 + 7 =$  \_\_\_\_\_