


Name _____

Directions: Read each problem. Trace the lines below the picture as you skip count. Multiply the problem. Rewrite the answer on the lines. Work the puzzler.

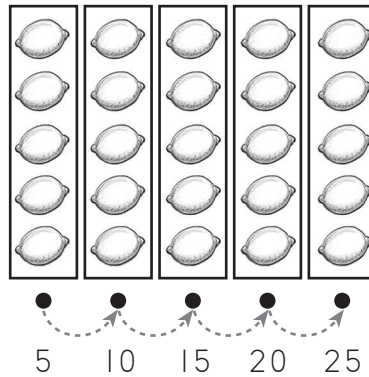
1. There are 4 sets.
There are 5 apples in each set.
Touch the dots and count by 5.
How many apples are there **in all**?



$$\begin{array}{r} 4 \text{ sets} \\ \times 5 \text{ apples} \\ \hline \end{array} \text{ apples}$$

Answer _____


2. There are 5 sets.
There are 5 lemons in each set.
Touch the dots and count by 5.
What is the number of lemons **altogether**?



$$\begin{array}{r} 5 \text{ sets} \\ \times 5 \text{ lemons} \\ \hline \end{array} \text{ lemons}$$

Answer _____

3. There are 9 sets.
There are 5 berries in each set.
Touch the dots and count by 5.
What is the **total** number of berries?



$$\begin{array}{r} 9 \text{ sets} \\ \times 5 \text{ berries} \\ \hline \end{array} \text{ berries}$$

Answer _____

☆ **Puzzler** ☆

Sequence count by 5 to 50.

5 _____ _____ _____ _____ _____ _____ _____ _____ 50

Name _____

Directions: Read the story and answer the questions below the story.

Mrs. Dilly spent an entire week canning pickles. It was hard work to be sure the jars and lids were clean and to make the pickles. Mrs. Dilly finally finished on Saturday!

When Mrs. Dilly counted the jars, she had 25 jars of sweet pickles and 7 times as many of sour pickles.

She took the pickles to the basement and stored them on her 8 pickle shelves. Unfortunately, a cat got in the basement and broke some of the pickle jars! Now Mrs. Dilly will have to pickle more pickles.

1. What was the total number of jars of sour pickles Mrs. Dilly canned?

Answer _____

2. If Mrs. Dilly could store 12 jars of pickles on each shelf in the basement, how many jars could be stored in all?

Answer _____

3. There were 9 sweet pickles in each jar. How many sweet pickles did Mrs. Dilly can?

Answer _____

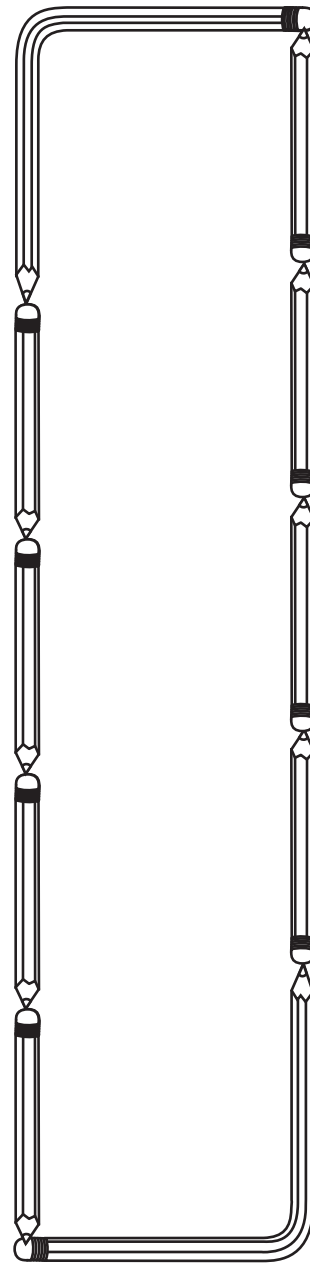
4. The cat in the basement knocked 14 jars of sour pickles off the shelf, and the jars broke! If there were 7 pickles in each jar, how many pickles were ruined?

Answer _____

5. There were 14 people in Mrs. Dilly's book club. If she took 2 jars of sweet pickles and 2 jars of sour pickles for each person, how many jars would she take for the members?

Answer _____

Show Your Work



☆ **Puzzler** ☆ Write the number.

One thousand two hundred = 1,200

Two thousand three hundred = _____

One thousand twenty = _____

Two thousand thirty = _____


One thousand two = _____

Name _____

Directions: Finding averages often requires the two steps of addition and division. Read each problem. Write the correct numbers in the work space, then find the answer. Rewrite the answer on the line. Work the puzzler.

1. In the distance race, Rudy rode his bike 16 miles. Alton rode his bike 18 miles and Jennifer rode hers for 14 miles. What was the average number of miles ridden in the race? _____
2. Craig ran 23 yards, Keith ran 41 yards, Vance ran 44 yards and Rodney ran 32 yards in Saturday's football game. What was the average number of yards for the 4 players? _____
3. Samuel practices the trumpet 3 hours on Monday, 2 hours on Tuesday, 3 hours on Wednesday, 4 hours on Thursday, 0 hours on Friday, 2 hours on Saturday and 7 hours on Sunday. What is the average number of hours Samuel practiced per day? _____
4. Sarah, Elizabeth, Rebecca and Samantha were beginning a babysitter's club. During their first week, Sarah babysat 4 hours, Elizabeth babysat 10 hours, Rebecca babysat 8 hours and Samantha babysat 2 hours. What is the average number of hours the 4 girls babysat their first week? _____
5. Derek's first 3 test scores in English this year were 93%, 74% and 88%. What is his average so far? _____

Show Your Work



☆ **Puzzler** ☆ Find the area of the triangles.

