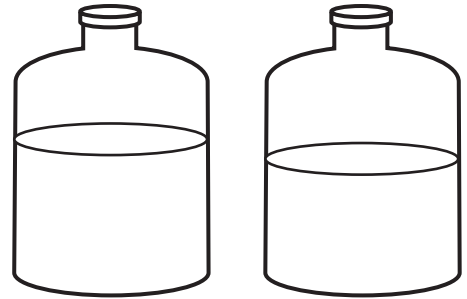
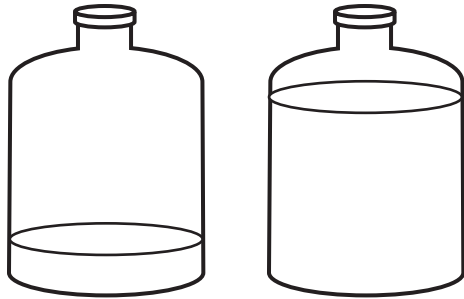
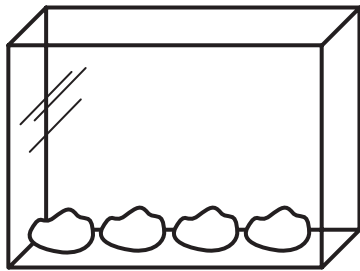


Name _____

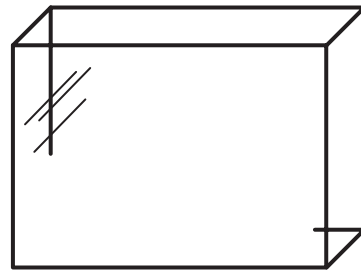
Ring the tanks showing the **least** amount of fuel.



Draw an **equal set** of moon rocks in the box on the **right**.



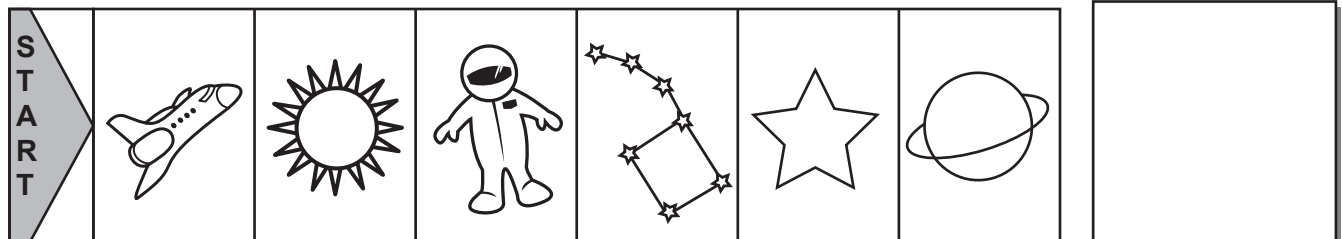
=



Count backward quietly as you write the numbers in order from 4 to zero.




On the game board, count back 3 spaces from the Big Dipper. In the box on the **right**, draw the item you find.




Name _____


Ring the paintbrushes with numbers **less than 5**.



Ring the paint cans with numbers **greater than 5**.



Yikes! UnoBear is trying to paint his bedroom but is making a big mess on the wall. Number the paint splotches from 9 to 2. Then quietly count backward from 9 to 2. Why do you think Uno had so much trouble painting his bedroom wall?



Name _____

Touch the first number, say its name, and count backward on the 1. Then trace and say the answer and read the **subtraction** problem. Check your work by crossing out one polar bear.

4

—

—

—

—

Touch the first number, say its name, and count backward on the 1. Then write the answer and read the **subtraction** problem. Check your work by crossing out one polar bear.

5

—

—

—

Touch the first number, say its name, and count backward on the 1. Then write the answer and read the **subtraction** problem. Check your work by crossing out one polar bear.

2

—

—

—

Touch the first number, say its name, and count backward on the 1. Then write the answer and read the **subtraction** problem. Check your work by crossing out one polar bear.

1

—

—

—

Name _____

Cross out some pigeons and write a **subtraction sentence**.



Total Number

?

How many are left?

□

□

Solve the **subtraction** problems.

$$\begin{array}{r} 5 \\ - 3 \\ \hline \end{array}$$

$$\begin{array}{r} 10 \\ - 4 \\ \hline \end{array}$$

$$\begin{array}{r} 3 \\ - 2 \\ \hline \end{array}$$

$$\begin{array}{r} 6 \\ - 3 \\ \hline \end{array}$$

$$\begin{array}{r} 4 \\ - 2 \\ \hline \end{array}$$

$$\begin{array}{r} 9 \\ - 8 \\ \hline \end{array}$$

$$\begin{array}{r} 1 \\ - 1 \\ \hline \end{array}$$

$$\begin{array}{r} 7 \\ - 1 \\ \hline \end{array}$$

- 2
- 3
- 1

- 0
- 2
- 1

- 0
- 1
- 2

- 7
- 6
- 5

Name _____

Touch the first number, say its name, and count backward on the TouchPoints of the second numeral. Fill in the bubble beside the correct answer. Then say the problem and answer.

$$\begin{array}{r} 5 \\ - 1 \\ \hline \end{array}$$

3

4

$$\begin{array}{r} 2 \\ - 2 \\ \hline \end{array}$$

0

1