

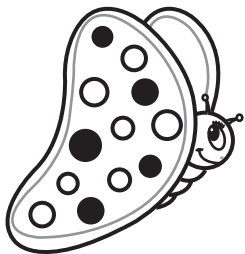





Name _____

Directions: Write the numbers in the four-leaf clovers as you count backward from the first number in each row.



Name _____

Directions: Solve each problem and fill in the puzzle.

	1			2			
			3			4	
		5			6		
	7			8			
			9			10	
		11			12		

Across:

- 6 + 4 = _____
- 8 + 6 = _____
- 5 + 7 = _____
- 9 + 3 = _____
- 7 + 6 = _____
- 4 + 9 = _____
- 8 + 7 = _____
- 3 + 8 = _____
- 9 + 8 = _____
- 8 + 8 = _____

Down:

- 6 + 9 = _____
- 4 + 8 = _____
- 6 + 6 = _____
- 6 + 7 = _____
- 9 + 4 = _____
- 9 + 6 = _____
- 5 + 5 = _____
- 9 + 2 = _____
- 8 + 9 = _____
- 9 + 7 = _____