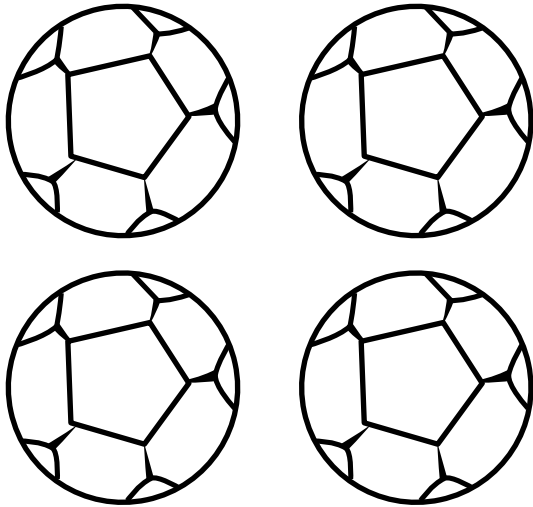


Name \_\_\_\_\_ Date \_\_\_\_\_

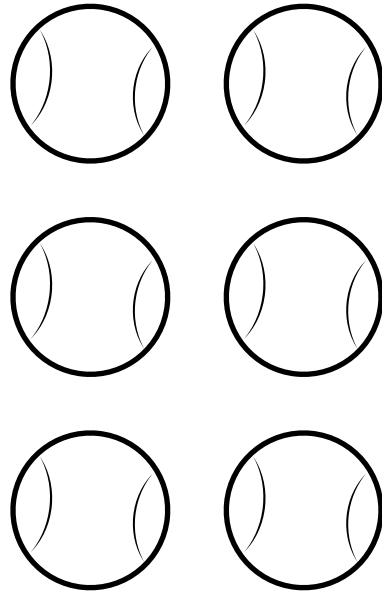
Grade Level \_\_\_\_\_ Total Correct \_\_\_\_\_ Total Incorrect \_\_\_\_\_

How many soccer balls are there?



Correct \_\_\_\_\_  
Incorrect \_\_\_\_\_  
Discontinued \_\_\_\_\_

How many tennis balls are there?



Correct \_\_\_\_\_  
Incorrect \_\_\_\_\_

Point to the three.

3      |      8

Correct \_\_\_\_\_  
Incorrect \_\_\_\_\_

Point to the eight.

6      8      9

Correct \_\_\_\_\_  
Incorrect \_\_\_\_\_

Say the names of the numbers you know.

1                      4                      9                      2

Correct \_\_\_\_\_  
Incorrect \_\_\_\_\_

Name \_\_\_\_\_

Date \_\_\_\_\_

Grade Level \_\_\_\_\_

Total Correct \_\_\_\_\_

Total Incorrect \_\_\_\_\_

$$\begin{array}{r} 2 \\ + 1 \\ \hline \end{array}$$

3

4

$$\begin{array}{r} 3 \\ + 2 \\ \hline \end{array}$$

5

6

$$\begin{array}{r} 4 \\ + 0 \\ \hline \end{array}$$

0

4

$$\begin{array}{r} 3 \\ + 3 \\ \hline \end{array}$$

8

6

$$\begin{array}{r} 6 \\ + 2 \\ \hline \end{array}$$

8

9

$$\begin{array}{r} 7 \\ + 1 \\ \hline \end{array}$$

6

8

$$\begin{array}{r} 3 \\ - 1 \\ \hline \end{array}$$

5

2

$$\begin{array}{r} 5 \\ - 2 \\ \hline \end{array}$$

3

2

$$\begin{array}{r} 7 \\ - 3 \\ \hline \end{array}$$

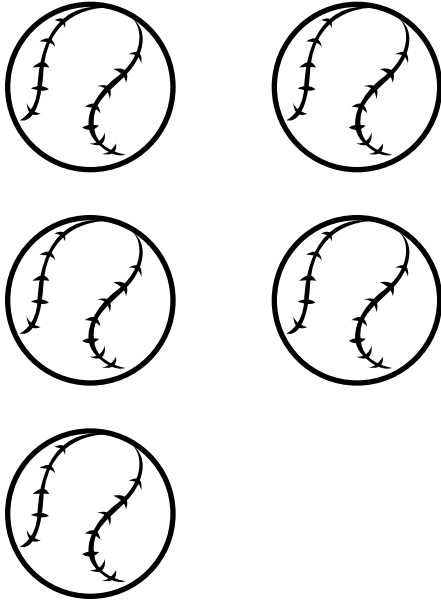
3

4

Name \_\_\_\_\_ Date \_\_\_\_\_

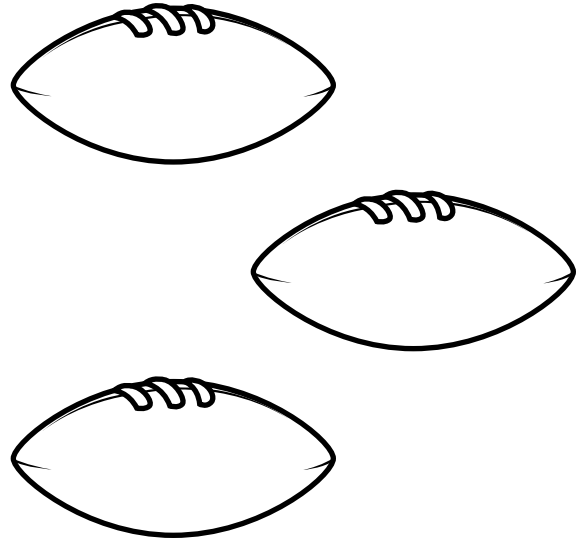
Grade Level \_\_\_\_\_ Total Correct \_\_\_\_\_ Total Incorrect \_\_\_\_\_

How many baseballs are there?



Correct \_\_\_\_\_  
Incorrect \_\_\_\_\_  
Discontinued \_\_\_\_\_

How many footballs are there?



Correct \_\_\_\_\_  
Incorrect \_\_\_\_\_

Point to the eight.

3      1      8

Correct \_\_\_\_\_  
Incorrect \_\_\_\_\_

Point to the six.

6      8      9

Correct \_\_\_\_\_  
Incorrect \_\_\_\_\_

Say the names of the numbers you know.

1                      5                      9                      7

Correct \_\_\_\_\_  
Incorrect \_\_\_\_\_

Name \_\_\_\_\_

Date \_\_\_\_\_

Grade Level \_\_\_\_\_

Total Correct \_\_\_\_\_

Total Incorrect \_\_\_\_\_

$$\begin{array}{r} 2 \\ + 2 \\ \hline \end{array}$$

3

4

$$\begin{array}{r} 3 \\ + 1 \\ \hline \end{array}$$

4

6

$$\begin{array}{r} 5 \\ + 0 \\ \hline \end{array}$$

0

5

$$\begin{array}{r} 3 \\ + 4 \\ \hline \end{array}$$

7

6

$$\begin{array}{r} 3 \\ + 2 \\ \hline \end{array}$$

5

9

$$\begin{array}{r} 7 \\ + 2 \\ \hline \end{array}$$

6

9

$$\begin{array}{r} 3 \\ - 2 \\ \hline \end{array}$$

5

1

$$\begin{array}{r} 6 \\ - 3 \\ \hline \end{array}$$

3

2

$$\begin{array}{r} 7 \\ - 2 \\ \hline \end{array}$$

3

5