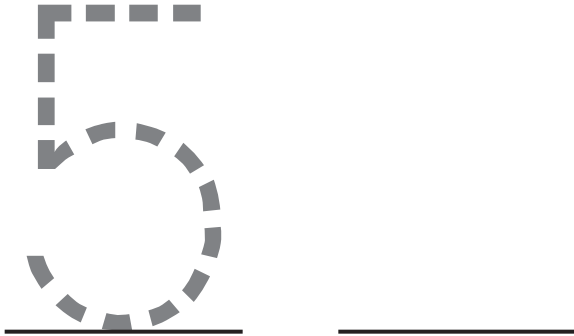
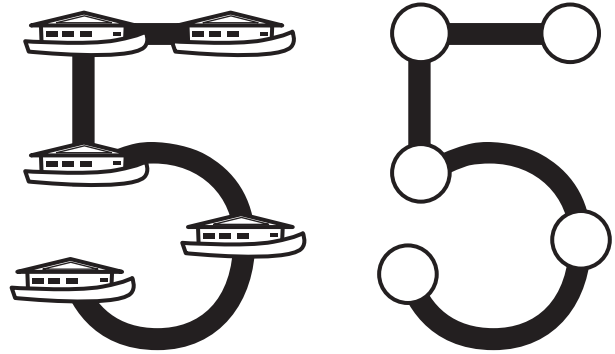


Name _____

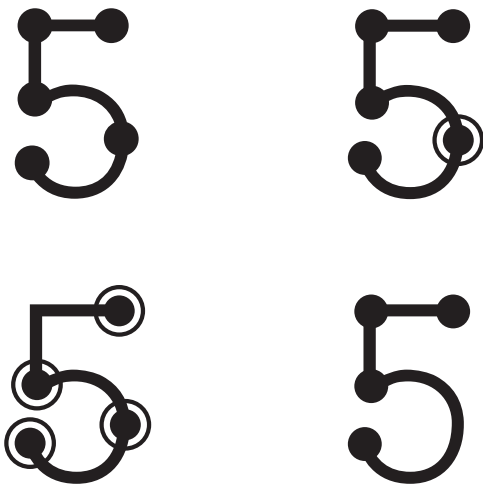
Trace. Then write the numeral 5.



Color 5 houseboats. Color 5 TouchPoints.








Ring the numeral with the correct TouchPoints.




Trace. Then write the word "five" two times.



1. _____
2. _____

MirabelMouse says, "My cookies are for my grandpa!" Draw **five** fish . Draw **five** windows . Color **five** socks  on the line. Color **five** boards on the roof  of the houseboat .



Name _____

Touch and count to **add**. Tom and Tim are helping out in the library. Touch and count the books. Then write the **addition fact** below. Watch your step, Tim!

$5 + 3 = \underline{\quad}$

$5 + 5 = \underline{\quad}$

$5 + 2 = \underline{\quad}$

$5 + 0 = \underline{\quad}$

$5 + 4 = \underline{\quad}$

$5 + 1 = \underline{\quad}$



+



Name _____

Touch the **greatest** number, say its name and cross it out. Continue counting on the TouchPoints of the other **addends**. Write the **total**.

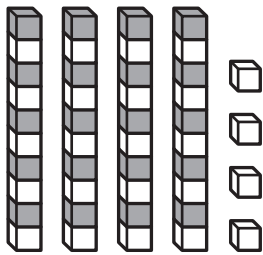
$$\begin{array}{r} 6 \\ 9 \\ 1 \\ 3 \\ + 4 \\ \hline \end{array}$$

$$\begin{array}{r} 4 \\ 2 \\ 8 \\ 3 \\ + 1 \\ \hline \end{array}$$

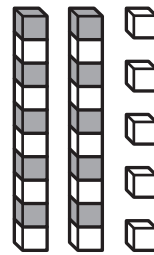
$$\begin{array}{r} 5 \\ 5 \\ 4 \\ 2 \\ + 2 \\ \hline \end{array}$$

$$\begin{array}{r} 6 \\ 2 \\ 3 \\ 5 \\ + 9 \\ \hline \end{array}$$

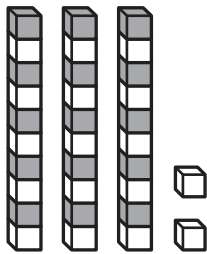
There are 10 blocks in each tower. Write the number of **tens** and **ones**. Then write the **total**.



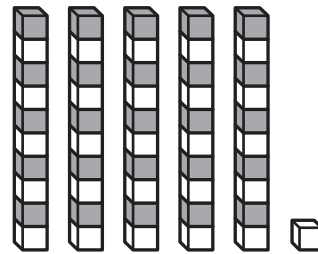
___ tens and ___ ones =



___ tens and ___ ones =



___ tens and ___ ones =



___ tens and ___ ones =

Name _____

Add the numbers below the arrow in the **ones** column and write the answer. Then **add** the numbers in the **tens** column and write the answer.

$$\begin{array}{r|l} \text{Tens} & \text{Ones} \\ \hline & \downarrow \\ 3 & 2 \\ + & 12 \\ \hline \end{array}$$

$$\begin{array}{r|l} \text{Tens} & \text{Ones} \\ \hline & \downarrow \\ 4 & 6 \\ + & 31 \\ \hline \end{array}$$

$$\begin{array}{r|l} \text{Tens} & \text{Ones} \\ \hline & \downarrow \\ 5 & 4 \\ + & 25 \\ \hline \end{array}$$

$$\begin{array}{r|l} \text{Tens} & \text{Ones} \\ \hline & \downarrow \\ 4 & 0 \\ + & 40 \\ \hline \end{array}$$

$$\begin{array}{r|l} \text{Tens} & \text{Ones} \\ \hline & \downarrow \\ 3 & 5 \\ + & 62 \\ \hline \end{array}$$

$$\begin{array}{r|l} \text{Tens} & \text{Ones} \\ \hline & \downarrow \\ 5 & 2 \\ + & 37 \\ \hline \end{array}$$




Take-Away Tom has 20 toy whales. Tim has **10 more** toy animals than Tom. How many animals does Tim have? How many animals do Tim and Tom have **altogether**?



has _____ animals.

_____ + _____ = _____ toy animals



Name _____

To **add**, touch and count the TouchPoints in the correct order. Darken the oval next to the correct answer.

$$\begin{array}{r} 3 \\ + 1 \\ \hline \end{array}$$

2
 4
 3

$$\begin{array}{r} 2 \\ + 2 \\ \hline \end{array}$$

1
 3
 4

$$\begin{array}{r} 1 \\ + 2 \\ \hline \end{array}$$

3
 1
 2

$$\begin{array}{r} 1 \\ + 1 \\ \hline \end{array}$$

5
 2
 3