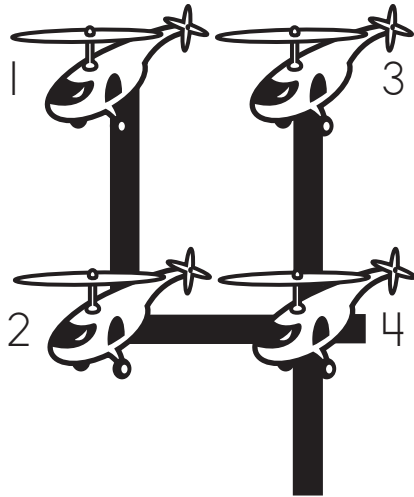
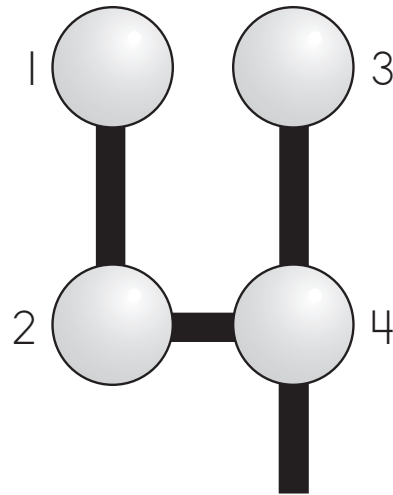


Name _____

Touch and count the helicopters on the numeral 4. Color them **blue**.



Touch and count the TouchPoints on the numeral 4. Color the TouchPoints **red**.




Trace the numeral 4. Then draw the TouchPoints and color them **red**.




Tag-Along Tim is Take-Away Tom's curious little brother. Tim loves toys. Draw **four** balloons for Tim to hold.

Trace and say the word "four."




Name _____

Trace, then write, the number 15.

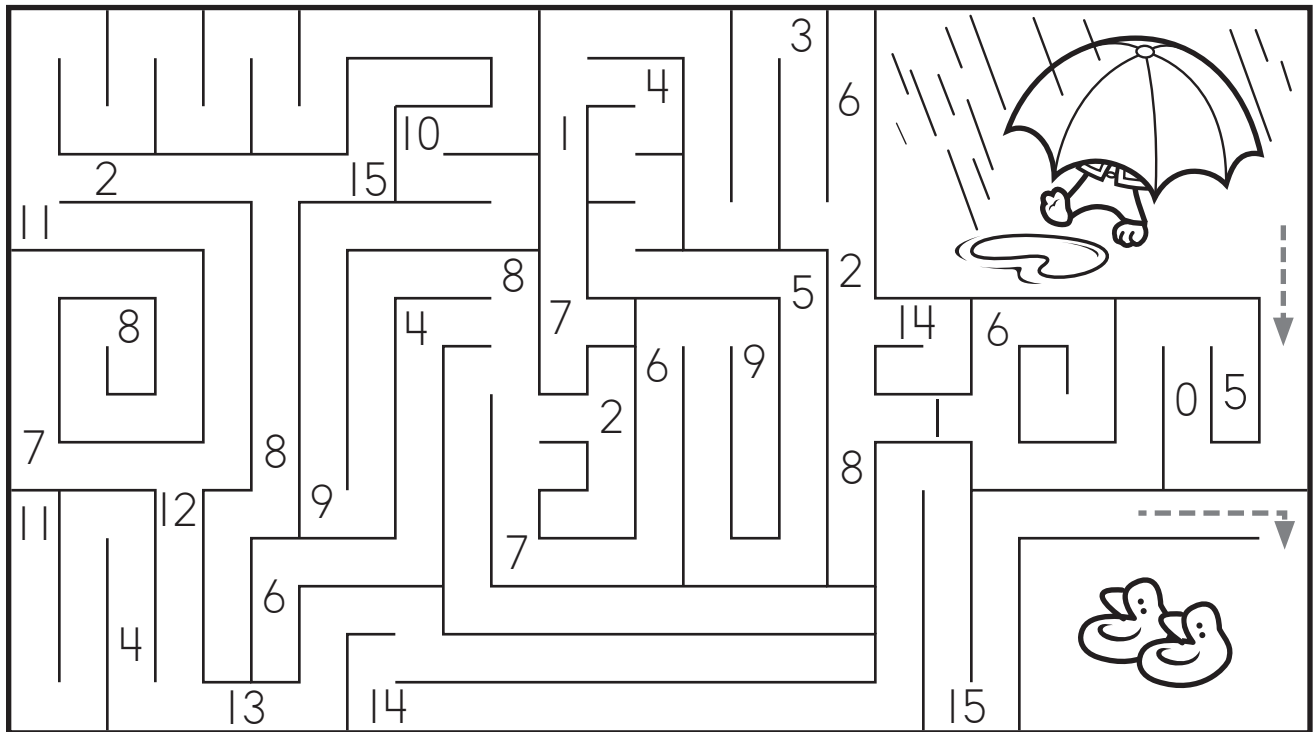


Four sets of handwriting lines, each consisting of a solid top line, a dashed middle line, and a solid bottom line, for practicing writing the number 15.

Ring a **group** of 15 sneakers. Draw a **line** (segment) **above** the **longest** sneaker.




Why do you think SkipperSkunk needs his boots today? Follow the numbers 0 through 15 to find Skipper's boots.



Name _____

Look at the **graph**. Draw hats to show **2 more** hats than there are snowmen.



Touch and count the TouchPoints to **add**. Write the **sum**.

$5 + 2 = \underline{\quad}$

$2 + 1 = \underline{\quad}$

$2 + 7 = \underline{\quad}$

$2 + 0 = \underline{\quad}$

$5 + 2 = \underline{\quad}$

$4 + 2 = \underline{\quad}$

Name _____

Touch and count to **add**. Find the **sum**.

$$\begin{array}{r} 4 \\ + 0 \\ \hline \bigcirc 4 \\ \bigcirc 5 \\ \bigcirc 0 \end{array}$$

$$\begin{array}{r} 4 \\ + 3 \\ \hline \bigcirc 8 \\ \bigcirc 7 \\ \bigcirc 6 \end{array}$$

$$\begin{array}{r} 4 \\ + 5 \\ \hline \bigcirc 10 \\ \bigcirc 9 \\ \bigcirc 8 \end{array}$$


$$\begin{array}{r} 4 \\ + 4 \\ \hline \text{---} \\ \text{---} \end{array}$$


$$\begin{array}{r} 6 \\ + 4 \\ \hline \text{---} \\ \text{---} \end{array}$$

$$\begin{array}{r} 1 \\ + 4 \\ \hline \text{---} \\ \text{---} \end{array}$$

Write an **addition sentence** about the sandals.



$$\begin{array}{r} \text{---} \\ \text{---} \\ \text{---} \end{array}$$




$$\begin{array}{r} \text{---} \\ \text{---} \\ \text{---} \end{array}$$


$$\begin{array}{r} \text{---} \\ \text{---} \\ \text{---} \end{array}$$

Name _____

Touch and count the TouchPoints. Trace only the correct answer. Then say the problem and answer.

$$2 + 4 =$$

$$5 + 2 =$$

