


Name _____

Use the chart to add 10 to each number below.

1	2	3	4	5	6	7	8	9	10
11	12	13	14	15	16	17	18	19	20
21	22	23	24	25	26	27	28	29	30
31	32	33	34	35	36	37	38	39	40
41	42	43	44	45	46	47	48	49	50
51	52	53	54	55	56	57	58	59	60
61	62	63	64	65	66	67	68	69	70
71	72	73	74	75	76	77	78	79	80
81	82	83	84	85	86	87	88	89	90
91	92	93	94	95	96	97	98	99	100



12 ____ 25 ____ 37 ____ 40 ____ 85 ____

77 ____ 67 ____ 81 ____ 90 ____ 18 ____

Say the name of the first number. Continue touching and counting on the TouchPoints of the second number. Then write the answer.

$$\begin{array}{r} 13 \\ + 4 \\ \hline \end{array}$$

Thirteen
14, 16,
15, 17

$$\begin{array}{r} 12 \\ + 3 \\ \hline \end{array}$$

$$\begin{array}{r} 14 \\ + 5 \\ \hline \end{array}$$

$$\begin{array}{r} 16 \\ + 4 \\ \hline \end{array}$$

$$\begin{array}{r} 18 \\ + 2 \\ \hline \end{array}$$

$$\begin{array}{r} 15 \\ + 5 \\ \hline \end{array}$$

$$\begin{array}{r} 11 \\ + 9 \\ \hline \end{array}$$

$$\begin{array}{r} 10 \\ + 7 \\ \hline \end{array}$$

$$\begin{array}{r} 17 \\ + 4 \\ \hline \end{array}$$

$$\begin{array}{r} 19 \\ + 7 \\ \hline \end{array}$$

$$\begin{array}{r} 13 \\ + 8 \\ \hline \end{array}$$

Name _____

Add the numbers below the arrow in the ones column and write the answer. Then add the numbers in the tens column and write the answer.

$$\begin{array}{r|l} \text{Tens} & \text{Ones} \\ \hline & \downarrow \\ 32 & \\ + 51 & \\ \hline \end{array}$$

$$\begin{array}{r|l} \text{Tens} & \text{Ones} \\ \hline & \downarrow \\ 24 & \\ + 21 & \\ \hline \end{array}$$

$$\begin{array}{r|l} \text{Tens} & \text{Ones} \\ \hline & \downarrow \\ 30 & \\ + 42 & \\ \hline \end{array}$$

$$\begin{array}{r|l} \text{Tens} & \text{Ones} \\ \hline & \downarrow \\ 41 & \\ + 15 & \\ \hline \end{array}$$

$$\begin{array}{r|l} \text{Tens} & \text{Ones} \\ \hline & \downarrow \\ 52 & \\ + 21 & \\ \hline \end{array}$$

$$\begin{array}{r|l} \text{Tens} & \text{Ones} \\ \hline & \downarrow \\ 71 & \\ + 14 & \\ \hline \end{array}$$

$$\begin{array}{r|l} \text{Tens} & \text{Ones} \\ \hline & \downarrow \\ 84 & \\ + 12 & \\ \hline \end{array}$$

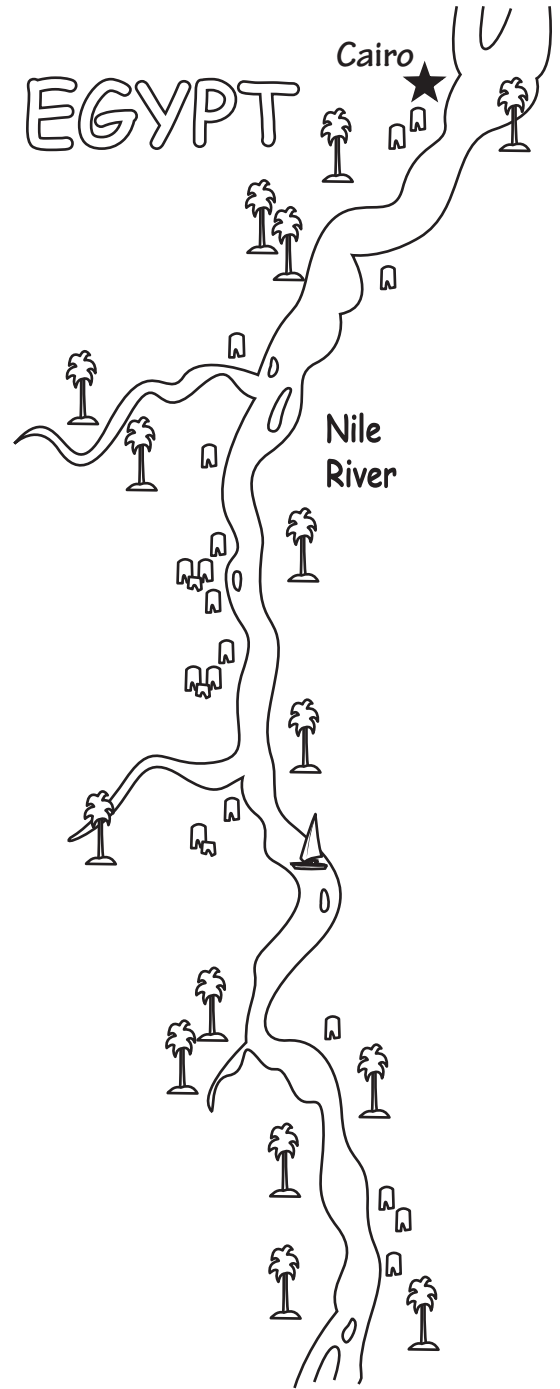
$$\begin{array}{r|l} \text{Tens} & \text{Ones} \\ \hline & \downarrow \\ 78 & \\ + 11 & \\ \hline \end{array}$$

$$\begin{array}{r|l} \text{Tens} & \text{Ones} \\ \hline & \downarrow \\ 20 & \\ + 46 & \\ \hline \end{array}$$

$$\begin{array}{r|l} \text{Tens} & \text{Ones} \\ \hline & \downarrow \\ 12 & \\ + 36 & \\ \hline \end{array}$$

$$\begin{array}{r|l} \text{Tens} & \text{Ones} \\ \hline & \downarrow \\ 72 & \\ + 23 & \\ \hline \end{array}$$

$$\begin{array}{r|l} \text{Tens} & \text{Ones} \\ \hline & \downarrow \\ 20 & \\ + 74 & \\ \hline \end{array}$$



Part of the Nile River runs through Egypt. The Nile is the longest river in the world. Rasha took a 25 minute boat ride down the Nile. It took her 43 minutes to return. How long was Rasha's ride?

_____ minutes

Name _____

Solve the addition problems.

H	T	O
□	□	↓
7	6	7
+	5	6
	7	7

H	T	O
□	□	↓
8	6	2
+	8	4
	9	9

H	T	O
□	□	↓
5	7	3
+	8	8
	9	9

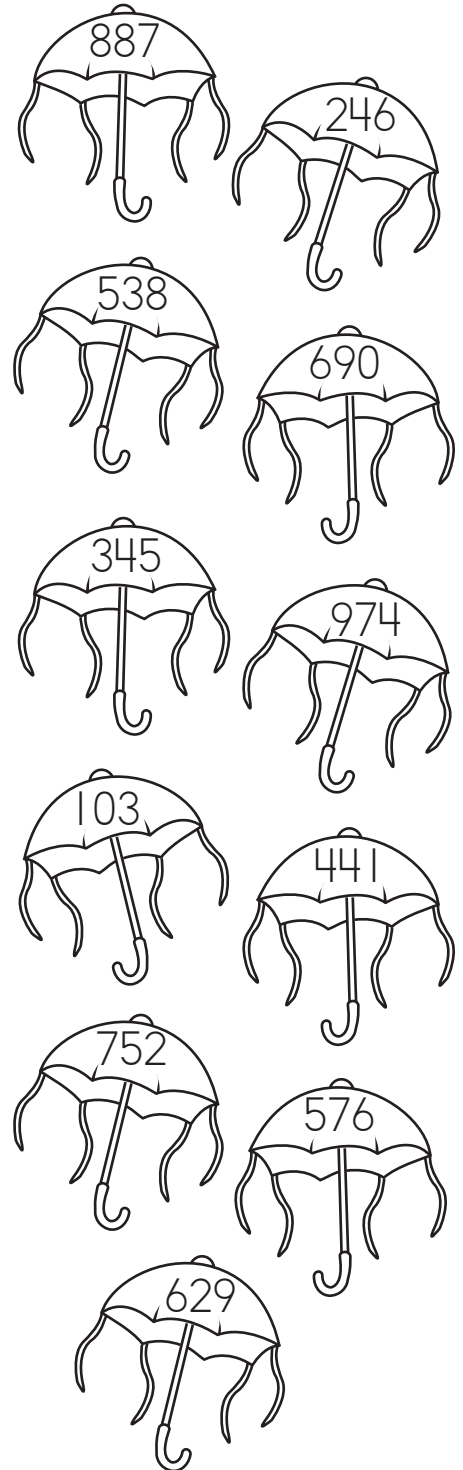
H	T	O
□	□	↓
5	8	8
+	6	9
	9	9

H	T	O
□	□	↓
7	6	5
+	5	4
	6	6

H	T	O
□	□	↓
7	4	1
+	7	7
	9	9

H	T	O
□	□	↓
	9	7
+	3	7
	7	7

H	T	O
□	□	↓
1	5	5
+	4	9
	9	9



Some Carnival dancers carry small umbrellas in the parades. They perform high jumps and look spectacular. Color the odd numbered umbrellas pink. Use different colors for the remaining umbrellas.

Name _____

Touch the TouchPoints as you skip count by 10. Do you see a pattern to your answers?

$$\begin{array}{r} 10 \\ \times 2 \\ \hline \end{array}$$

$$\begin{array}{r} 10 \\ \times 5 \\ \hline \end{array}$$

$$\begin{array}{r} 10 \\ \times 3 \\ \hline \end{array}$$

$$\begin{array}{r} 10 \\ \times 6 \\ \hline \end{array}$$

$$\begin{array}{r} 10 \\ \times 4 \\ \hline \end{array}$$

$$\begin{array}{r} 10 \\ \times 7 \\ \hline \end{array}$$

$$\begin{array}{r} 10 \\ \times 9 \\ \hline \end{array}$$



$$\begin{array}{r} 10 \\ \times 1 \\ \hline \end{array}$$

$$\begin{array}{r} 10 \\ \times 0 \\ \hline \end{array}$$

$$\begin{array}{r} 10 \\ \times 8 \\ \hline \end{array}$$

Multiply the numbers in the top row by the numbers in the left column.

×	0	1	2	3	4	5	6	7	8	9
0			0							
1		1								
2								14		
5					20					
10							60			



Name _____

Touch and count the TouchPoints to add. Write the answer.

$$\begin{array}{r} 5 \\ + 3 \\ \hline \end{array}$$

$$\begin{array}{r} 3 \\ + 1 \\ \hline \end{array}$$

$$\begin{array}{r} 2 \\ + 4 \\ \hline \end{array}$$

$$\begin{array}{r} 3 \\ + 7 \\ \hline \end{array}$$

$$\begin{array}{r} 3 \\ + 5 \\ \hline \end{array}$$

$$\begin{array}{r} 2 \\ + 3 \\ \hline \end{array}$$

$$\begin{array}{r} 5 \\ + 2 \\ \hline \end{array}$$

$$\begin{array}{r} 1 \\ + 2 \\ \hline \end{array}$$

$$\begin{array}{r} 5 \\ + 4 \\ \hline \end{array}$$

$$\begin{array}{r} 4 \\ + 5 \\ \hline \end{array}$$

$$\begin{array}{r} 3 \\ + 4 \\ \hline \end{array}$$

$$\begin{array}{r} 2 \\ + 0 \\ \hline \end{array}$$

$$\begin{array}{r} 5 \\ + 1 \\ \hline \end{array}$$

$$\begin{array}{r} 3 \\ + 3 \\ \hline \end{array}$$

$$\begin{array}{r} 2 \\ + 7 \\ \hline \end{array}$$

$$\begin{array}{r} 7 \\ + 1 \\ \hline \end{array}$$